


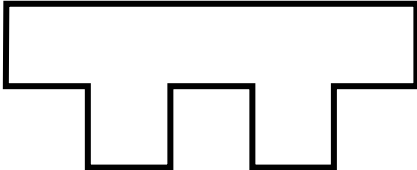
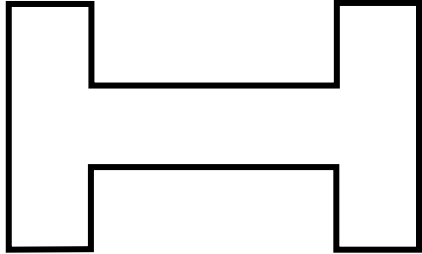
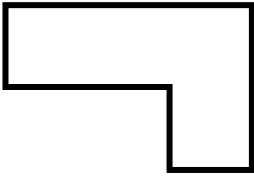

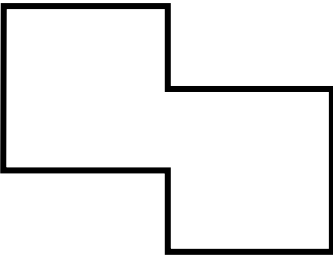


Multiplication Tile Challenges

DAY 28
1 of 1

Use each clue to find the value of each shape. Write the values in the boxes on the right. When finished, check the answers using the answer key. Examples are on page 24.

<div style="display: flex; justify-content: space-between; align-items: center;"> <div style="border: 1px solid black; width: 40px; height: 40px; display: flex; align-items: center; justify-content: center;"> □ </div> <div style="margin-left: 10px;">= 4</div> <div style="margin-left: 100px;">A</div> </div> <div style="text-align: center; margin-top: 20px;">  </div>	<div style="display: flex; justify-content: space-between; align-items: center;"> <div style="border: 1px solid black; width: 40px; height: 40px; display: flex; align-items: center; justify-content: center;"> □ </div> <div style="margin-left: 10px;">= 4</div> <div style="margin-left: 100px;">B</div> </div> <div style="text-align: center; margin-top: 20px;">  </div>
<div style="display: flex; justify-content: space-between; align-items: center;"> <div style="border: 1px solid black; width: 40px; height: 40px; display: flex; align-items: center; justify-content: center;"> □ </div> <div style="margin-left: 10px;">= 4</div> <div style="margin-left: 100px;">C</div> </div> <div style="text-align: center; margin-top: 20px;">  </div>	<div style="display: flex; justify-content: space-between; align-items: center;"> <div style="border: 1px solid black; width: 40px; height: 40px; display: flex; align-items: center; justify-content: center;"> □ </div> <div style="margin-left: 10px;">= 4</div> <div style="margin-left: 100px;">D</div> </div> <div style="text-align: center; margin-top: 20px;">  </div>
<div style="display: flex; justify-content: space-between; align-items: center;"> <div style="border: 1px solid black; width: 40px; height: 40px; display: flex; align-items: center; justify-content: center;"> □ </div> <div style="margin-left: 10px;">= 4</div> <div style="margin-left: 100px;">E</div> </div> <div style="text-align: center; margin-top: 20px;">  </div>	<div style="display: flex; justify-content: space-between; align-items: center;"> <div style="border: 1px solid black; width: 40px; height: 40px; display: flex; align-items: center; justify-content: center;"> □ </div> <div style="margin-left: 10px;">= 4</div> <div style="margin-left: 100px;">F</div> </div> <div style="text-align: center; margin-top: 20px;">  </div>
<div style="display: flex; justify-content: space-between; align-items: center;"> <div style="border: 1px solid black; width: 40px; height: 40px; display: flex; align-items: center; justify-content: center;"> □ </div> <div style="margin-left: 10px;">= 4</div> <div style="margin-left: 100px;">G</div> </div> <div style="text-align: center; margin-top: 20px;">  </div>	<div style="display: flex; justify-content: space-between; align-items: center;"> <div style="border: 1px solid black; width: 40px; height: 40px; display: flex; align-items: center; justify-content: center;"> □ </div> <div style="margin-left: 10px;">= 4</div> <div style="margin-left: 100px;">H</div> </div> <div style="text-align: center; margin-top: 20px;">  </div>

Key
10

A

B

C

D

E

F

G

H

Answer Keys

Key 4	Key 5	Key 6	Key 7	Key 8	Key 9	Key 10	Key 11
0	6	15	45	0	50	20	45
0	0		18	0	3		72
0	6		36	0	12		18
0	30	6	81	0	10	8	54
	8		54		2		36
7				9			
5	8		72	3	14		63
5	0	27	27	5	9	24	27
2	8		63	2	6		81
	5	9	45		0	28	18
60	20		36	60	0		45
80				30			
30				40			
50	0	12	72	50	40	36	54
	10		18		10		27
5	4	21	63	7	8	16	81
	0				80		
7	6			9	4		
9	1	24	81	8	0	12	72
	10		54		0		36
6 × 9	0	18	27	6 × 5	4	32	63
8 × 10	36			8 × 4	25		
	100				72		